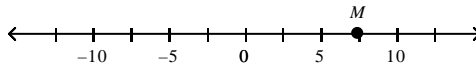


CA Grade 6 Standard 6.NS.1.1

MULTIPLE CHOICE

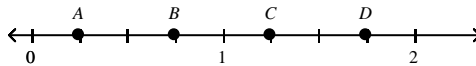
1. What is the value of M on the number line below?



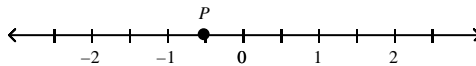
- A. 5.5
B. 6
C. 7.5
D. 9
2. Which of the following numbers is *greater* than all the numbers in the list below?

$$-\frac{7}{3}, -2.35, -2\frac{1}{2}, -2.4$$

- A. -2.3
B. -2.5
C. -2.7
D. -2.8
3. Which point shows the location of $\frac{5}{4}$ on the number line?



- A. point A
B. point B
C. point C
D. point D
4. Which list of numbers is ordered from *greatest* to *least*?
- A. $1.41, 1.4, 1\frac{1}{4}, \frac{4}{4}$
B. $1\frac{1}{4}, 1.4, \frac{4}{4}, 1.41$
C. $1.4, \frac{4}{4}, 1.41, 1\frac{1}{4}$
D. $1.4, 1.41, \frac{4}{4}, 1\frac{1}{4}$
5. What is the value of point P , in decimal form, on the number line below?



- A. -1.5
B. -0.5
C. -0.1
D. 0.5

